

Thursday - Maths activities



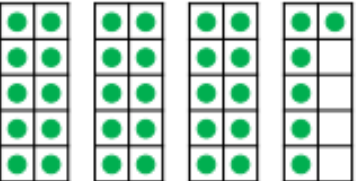
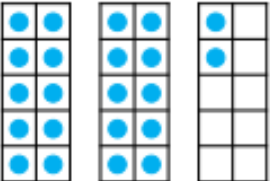


We are learning to count in 2s, 10s and 5s

Print some 100 squares and practise counting in 2s or 10s or 5s. Colour in each square, e.g. 2,4,6,8,10... 10, 20, 30... 5,10,15,20... Do you notice a pattern? When you have coloured in the numbers, practise counting aloud in 2s, 10s or 5s. Can you count without looking?

If you want to try a trickier challenge, practise counting in 3s or 4s.

1	2	3	4	5	6	7	8	9	10
11	12	13	14	15	16	17	18	19	20
21	22	23	24	25	26	27	28	29	30
31	32	33	34	35	36	37	38	39	40
41	42	43	44	45	46	47	48	49	50
51	52	53	54	55	56	57	58	59	60
61	62	63	64	65	66	67	68	69	70
71	72	73	74	75	76	77	78	79	80
81	82	83	84	85	86	87	88	89	90
91	92	93	94	95	96	97	98	99	100

We are learning the place value of numbers

<p>1a. Circle the number that is one more than the amount shown below.</p>  <p>★ 45 40 37</p> <p style="text-align: right;">VF</p>	<p>1b. Circle the number that is one less than the amount shown below.</p>  <p>★ 48 16 33</p> <p style="text-align: right;">VF</p>
<p>2a. Find one more and one less than the number shown below.</p>  <p>33 34 35 36 37 38 39</p> <p>One more is <input type="text"/>.</p> <p>One less is <input type="text"/>.</p> <p>★</p> <p style="text-align: right;">VF</p>	<p>2b. Find one more and one less than the number shown below.</p>  <p>19 20 21 22 23 24 25</p> <p>One more is <input type="text"/>.</p> <p>One less is <input type="text"/>.</p> <p>★</p> <p style="text-align: right;">VF</p>
<p>3a. Complete the sentences.</p>  <p>24 25 26 27 28 29 30</p> <p>There are <input type="text"/> beads.</p> <p>One more than <input type="text"/> is <input type="text"/>.</p> <p>★</p> <p style="text-align: right;">VF</p>	<p>3b. Complete the sentences.</p>  <p>30 31 32 33 34 35 36</p> <p>There are <input type="text"/> beads.</p> <p>One less than <input type="text"/> is <input type="text"/>.</p> <p>★</p> <p style="text-align: right;">VF</p>
<p>4a. Use the number track to complete the sentence.</p> <p>41 42 43 44 45 46 47</p> <p>★ 44 is one less than <input type="text"/>.</p> <p style="text-align: right;">VF</p>	<p>4b. Use the number track to complete the sentence.</p> <p>24 25 26 27 28 29 30</p> <p>★ 27 is one more than <input type="text"/>.</p> <p style="text-align: right;">VF</p>