

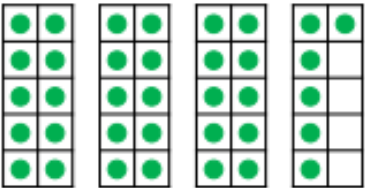
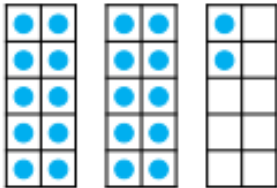

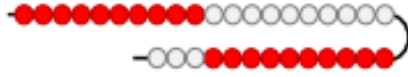
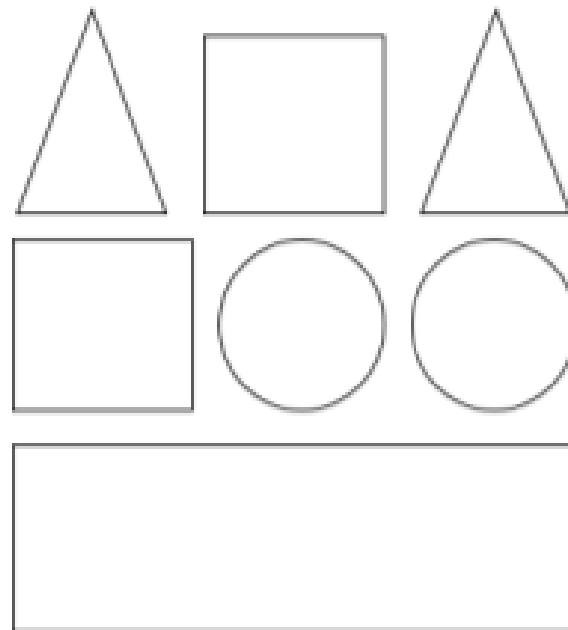


Monday







<p>1a. Circle the number that is one more than the amount shown below.</p>  <p>★ 45      40      37      VF</p>	<p>1b. Circle the number that is one less than the amount shown below.</p>  <p>★ 48      16      33      VF</p>
<p>2a. Find one more and one less than the number shown below.</p>  <p>33   34   35   36   37   38   39</p> <p>One more is <input type="text"/>.</p> <p>One less is <input type="text"/>.</p> <p>★      VF</p>	<p>2b. Find one more and one less than the number shown below.</p>  <p>19   20   21   22   23   24   25</p> <p>One more is <input type="text"/>.</p> <p>One less is <input type="text"/>.</p> <p>★      VF</p>
<p>3a. Complete the sentences.</p>  <p>24   25   26   27   28   29   30</p> <p>There are <input type="text"/> beads.</p> <p>One more than <input type="text"/> is <input type="text"/>.</p> <p>★      VF</p>	<p>3b. Complete the sentences.</p>  <p>30   31   32   33   34   35   36</p> <p>There are <input type="text"/> beads.</p> <p>One less than <input type="text"/> is <input type="text"/>.</p> <p>★      VF</p>
<p>4a. Use the number track to complete the sentence.</p> <p>41   42   43   44   45   46   47</p> <p>★ 44 is one less than <input type="text"/>.</p> <p>VF</p>	<p>4b. Use the number track to complete the sentence.</p> <p>24   25   26   27   28   29   30</p> <p>★ 27 is one more than <input type="text"/>.</p> <p>VF</p>

Tuesday

Use the clues to colour the shapes.



- The circle in the middle is blue.
- The circle on the right is red.
- The shape up from the right circle is green.
- The shape down from the circles is green.
- The square to the left of the green triangle is red.
- The four-sided shape up from the rectangle is blue.
- The triangle on the left is red.

<p>1a. Circle the number that is one more than the amount shown below.</p>  <p>★ 24      40      31      VF</p>	<p>1b. Circle the number that is one less than the amount shown below.</p>  <p>★ 29      38      19      VF</p>
<p>2a. Find one more and one less than the number shown below.</p>  <p>28   29   30   31   32   33   34</p> <p>One more is <input type="text"/>.</p> <p>One less is <input type="text"/>.</p> <p>★ VF</p>	<p>2b. Find one more and one less than the number shown below.</p>  <p>37   38   39   40   41   42   43</p> <p>One more is <input type="text"/>.</p> <p>One less is <input type="text"/>.</p> <p>★ VF</p>
<p>3a. Complete the sentences.</p>  <p>There are <input type="text"/> straws.</p> <p>One more than <input type="text"/> is <input type="text"/>.</p> <p>One less than <input type="text"/> is <input type="text"/>.</p> <p>★ VF</p>	<p>3b. Complete the sentences.</p>  <p>There are <input type="text"/> straws.</p> <p>One more than <input type="text"/> is <input type="text"/>.</p> <p>One less than <input type="text"/> is <input type="text"/>.</p> <p>★ VF</p>
<p>4a. Use the number track to complete the sentence.</p> <p>35   36   37   38   39   40   41</p> <p>★ 38 is one less than <input type="text"/>.</p> <p>VF</p>	<p>4b. Use the number track to complete the sentence.</p> <p>37   38   39   40   41   42   43</p> <p>★ 40 is one more than <input type="text"/>.</p> <p>VF</p>

Thursday – Complete a 3D shape hunt in your home – make a tally of those you find. Can you recognise and name the 3D shapes?

Can you find these shapes in your home? How many can you find? Make a tally.  
Can you name them without looking at the shape names below?



**sphere**



**pyramid**



**cone**



**cube**



**cuboid**



**cylinder**



**triangular**

**prism**

Friday

1a. Circle the number that is one more than the amount shown below.



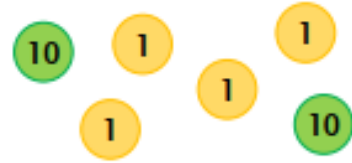
34

49

41

VF

1b. Circle the number that is one less than the amount shown below.



32

26

23

VF

2a. Find one more and one more again than twenty-nine.



One more is .

One more again is .



VF

2b. Find one less and one less again than thirty-one.



One less is .

One less again is .



VF

3a. Complete the sentences.



The number is .

One more than  is .

One more again is .



VF

3b. Complete the sentences.



The number is .

One less than  is .

One less again is .



VF

4a. Use the number track to complete the sentence.



is one less than 40.



VF

4b. Use the number track to complete the sentence.



is one less than 30.



VF